



花野 24

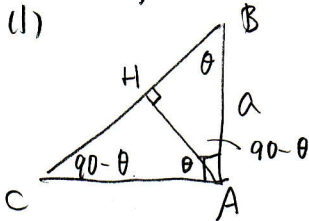
直角三角形 ABC において、 $\angle A = \frac{\pi}{2}$ 、 $AB = a$ (一定)、頂点 A から斜辺 BC に引いた垂線の足を H とし、 $\angle B = \theta$ とするとき、次の極限值を求めよ。

(1) $\lim_{\theta \rightarrow 0} \frac{CH}{\theta^2}$

(2) $\lim_{\theta \rightarrow 0} \frac{AC - AH}{\theta^3}$

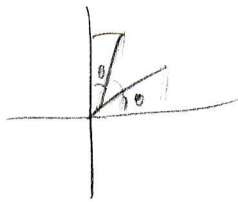
[早稲田]

(1)



$$\frac{a}{CB} = \sin(90 - \theta) = \cos \theta$$

$$\therefore CB = \frac{a}{\cos \theta}$$



$$\frac{BH}{a} = \sin(90 - \theta) = \cos \theta$$

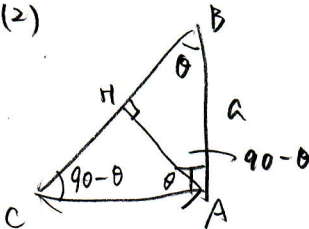
$$BH = a \cos \theta$$

$$\therefore CH = CB - BH = \frac{a}{\cos \theta} - a \cos \theta$$

$$\lim_{\theta \rightarrow 0} \frac{\frac{a}{\cos \theta} - a \cos \theta}{\theta^2} = \lim_{\theta \rightarrow 0} \frac{a(1 - \cos^2 \theta)}{\theta^2 \cos \theta} = \lim_{\theta \rightarrow 0} \frac{\sin^2 \theta}{\theta^2} \cdot \frac{a}{\cos \theta}$$

$$= a$$

(2)



$$AH = a \cos(90 - \theta)$$

$$= a \sin \theta$$

$$\frac{a}{AC} = \tan(90 - \theta) = \frac{1}{\tan \theta}$$

$$AC = a \tan \theta$$

$$\frac{a \tan \theta - a \sin \theta}{\theta^3} = \frac{a \sin \theta - a \sin \theta \cos \theta}{\theta^3 \cos \theta} = \frac{a \sin \theta (1 - \cos \theta)}{\theta^3 \cos \theta}$$

$$= \frac{a \sin \theta \cdot (1 - \cos^2 \theta)}{\theta^3 \cos \theta (1 + \cos \theta)} = \frac{a \sin^3 \theta}{\theta^3} \cdot \frac{1}{\cos \theta (1 + \cos \theta)}$$

$$\therefore \lim_{\theta \rightarrow 0} \frac{a \sin^3 \theta}{\theta^3} \frac{1}{\cos \theta (1 + \cos \theta)} = a \cdot \frac{1}{2} = \frac{a}{2}$$