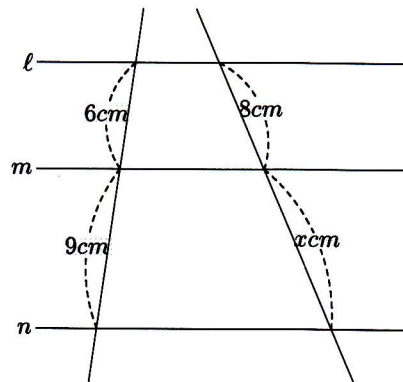


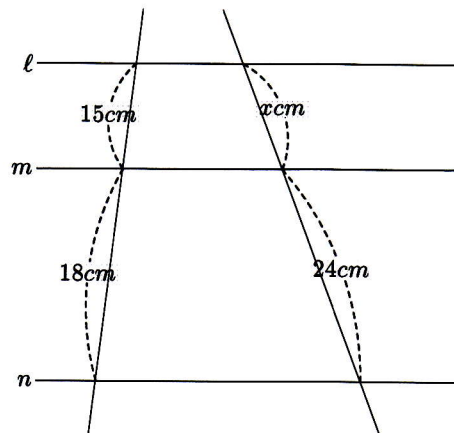


平行線と線分の比1
次の図において $l//m//n$ のとき、 x の値を求めなさい。



$$6:9 = 8:x$$

$$x = 12$$

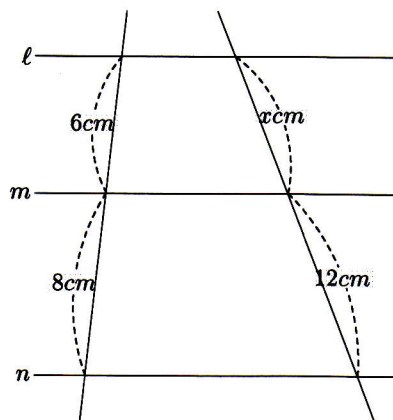


$$15:18 = x:24$$

$$5:6 = x:24$$

$$6x = 5 \times 24$$

$$x = 20$$



$$3:4 = x:12$$

$$4x = 36$$

$$x = 9$$

$$x = 9$$

