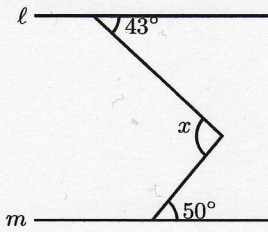




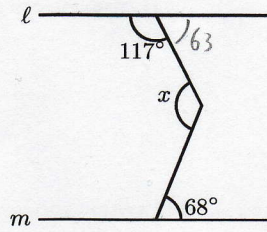
次の図で $l \parallel m$ のとき、 $\angle x$ の大きさを求めなさい。

(1)



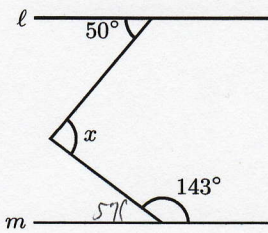
93°

(2)



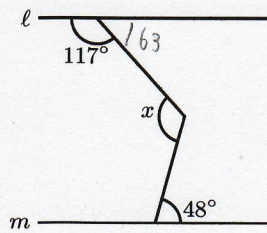
131°

(3)



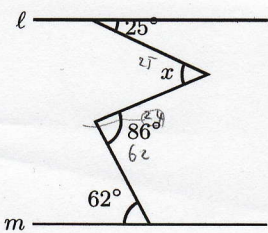
107°

(4)



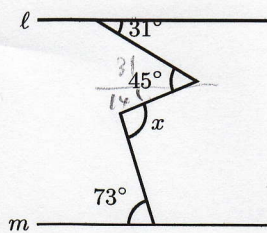
111°

(5)



49°

(6)



87°

