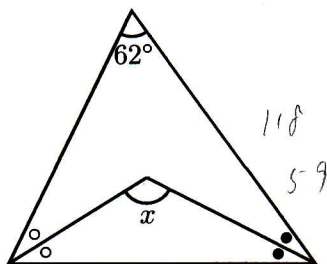




5

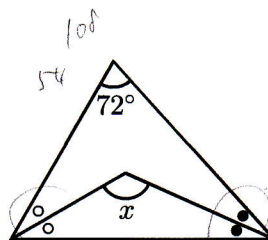
次の $\angle x$ の大きさを求めなさい。ただし印のついた角の大きさは等しい。

(1)



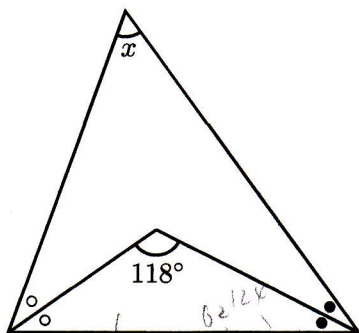
121°

(2)



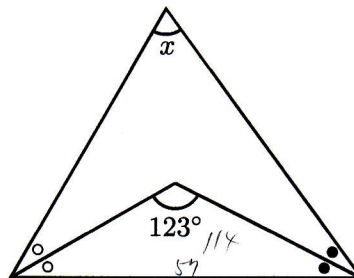
126°

(3)



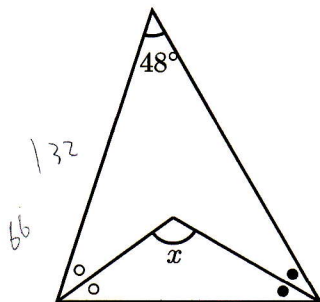
56°

(4)



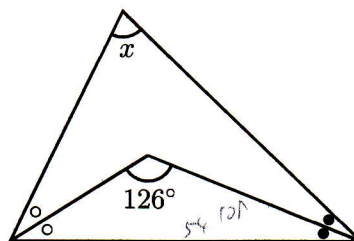
66°

(5)



114°

(6)



72°

