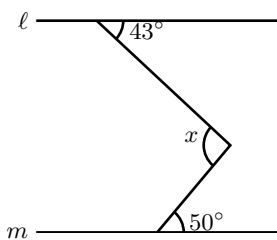
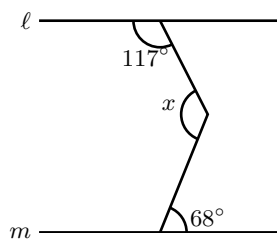


次の図で  $l \parallel m$  のとき、 $\angle x$  の大きさを求めなさい。

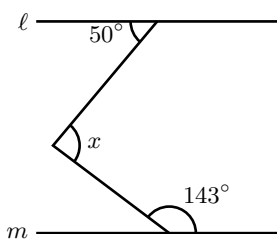
(1)



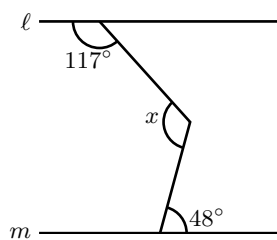
(2)



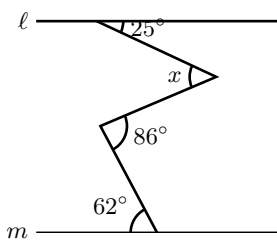
(3)



(4)



(5)



(6)

